

() 組 () 番 名前 ()

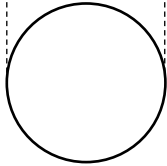
次の投影図はどんな立体を表したものが答えなさい。ただし、黒点は頂点を表します。

(1)

(立面図)

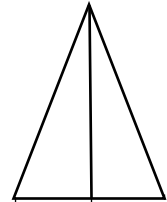


(平面図)

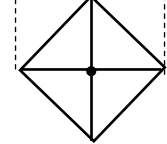


(2)

(立面図)

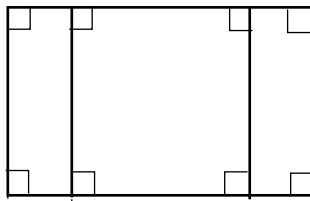


(平面図)




(3)

(立面図)

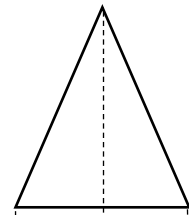


(平面図)



(4)

(立面図)



(平面図)

