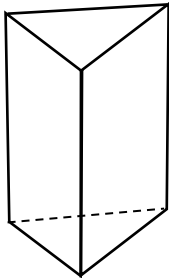
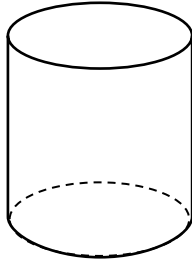


() 組 () 番 名前 ()

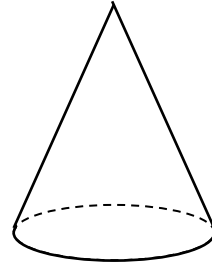
下の立体について、それぞれの名称を に書き入れなさい。



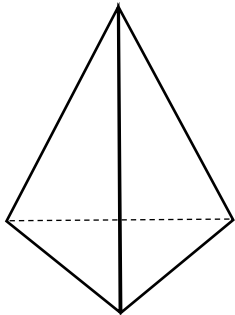
三角柱



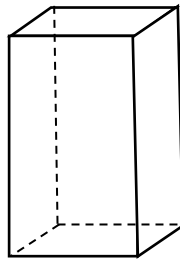
円柱



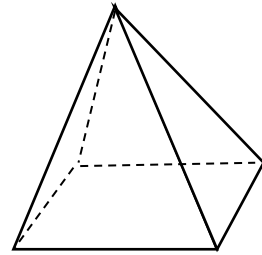
円錐



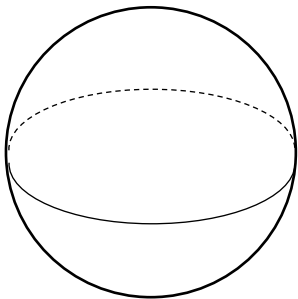
三角錐



四角柱(直方体)



四角錐



球