

() 組 () 番 名前 ()

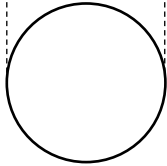
次の投影図はどんな立体を表したものが答えなさい。ただし、黒点は頂点を表します。

(1)

(立面図)



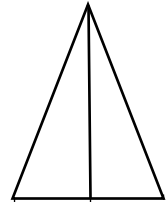
(平面図)



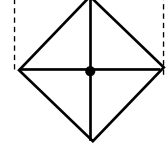
円柱

(2)

(立面図)



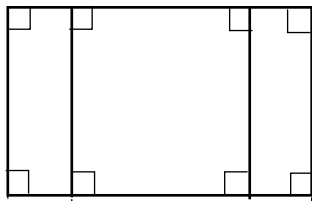
(平面図)




四角^{すい}錐

(3)

(立面図)



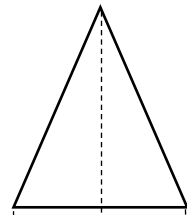
(平面図)



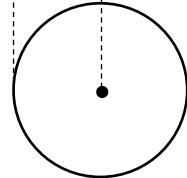
四角柱

(4)

(立面図)



(平面図)



円^{すい}錐