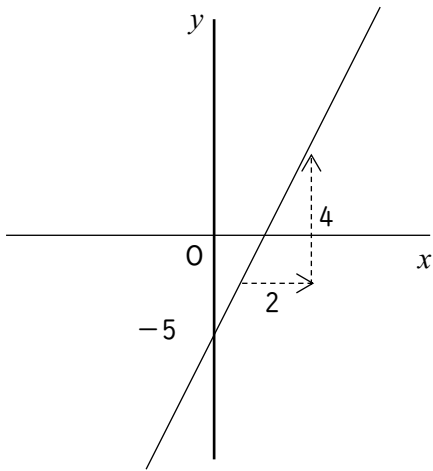


( ) 組 ( ) 番 名前 ( )

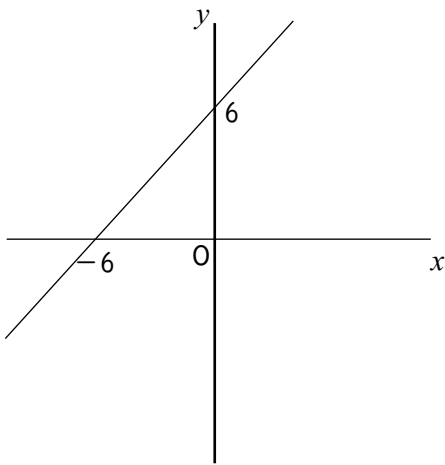
次の(1)~(3)のグラフの式を求めなさい。

(1)



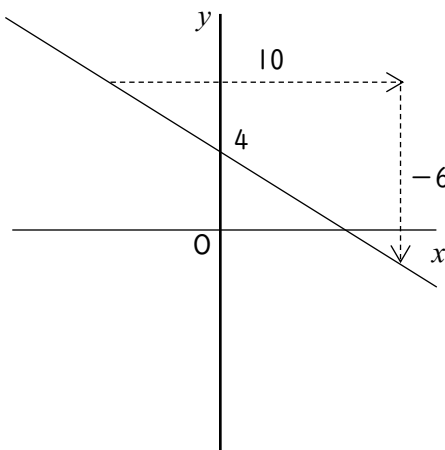
$$y = 2x - 5$$

(2)



$$y = x + 6$$

(3)



$$y = -\frac{3}{5}x + 4$$