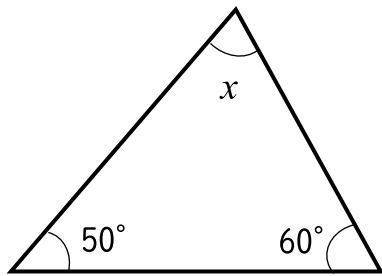


() 組 () 番 名前 ()

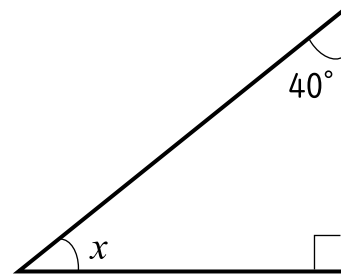
次の三角形において、 $\angle x$ の大きさを求めなさい。

(1)



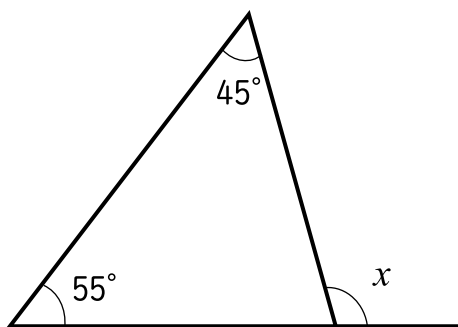
$\angle x =$

(2)



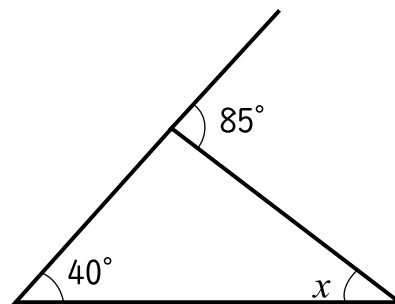
$\angle x =$

(3)



$\angle x =$

(4)



$\angle x =$