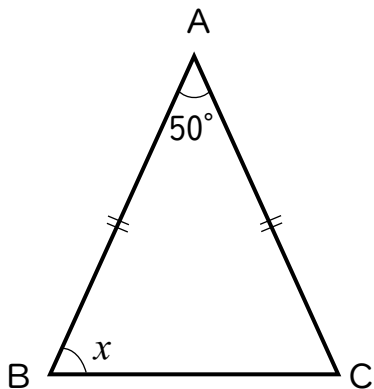


() 組 () 番 名前 ()

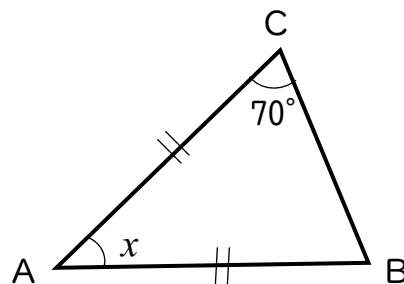
下の図で、 $\triangle ABC$ は $AB=AC$ の二等辺三角形です。 $\angle x$ の大きさを求めなさい。

(1)



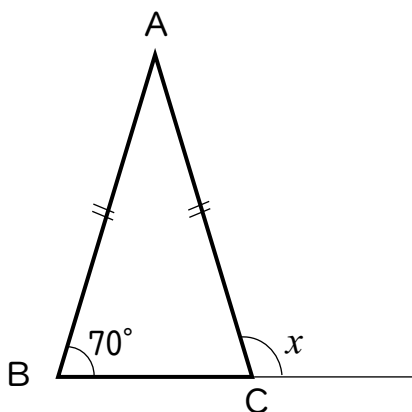
$\angle x =$

(2)



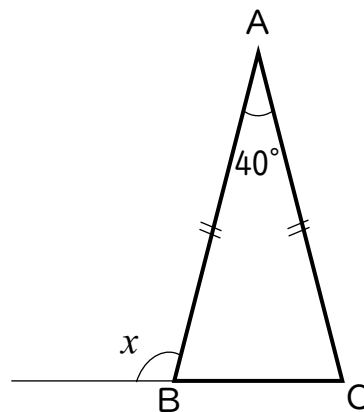
$\angle x =$

(3)



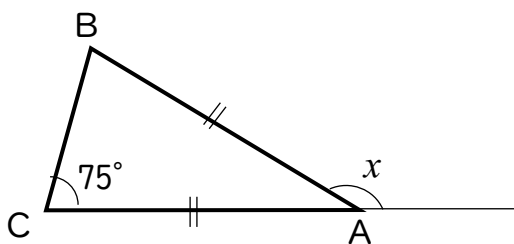
$\angle x =$

(4)



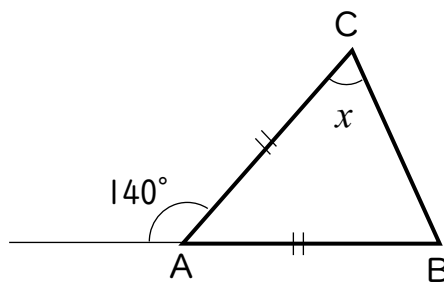
$\angle x =$

(5)



$\angle x =$

(6)



$\angle x =$