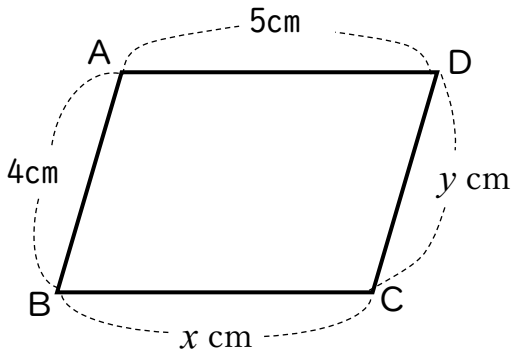


() 組 () 番 名前 ()

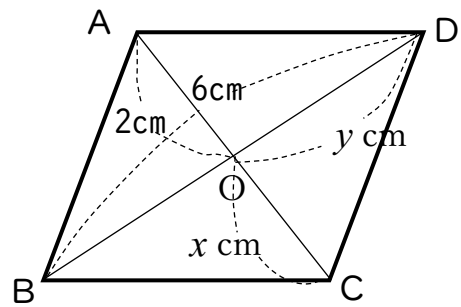
次の図で、四角形 ABCD は平行四辺形、O は対角線の交点です。x, y の値を求めなさい。

(1)



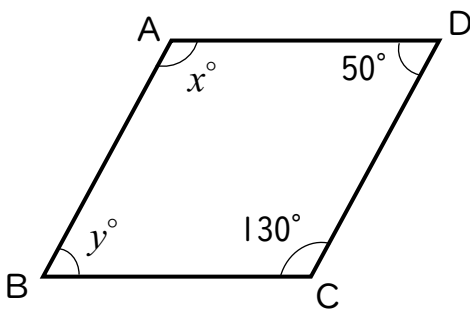
$x = 5, y = 4$

(2)



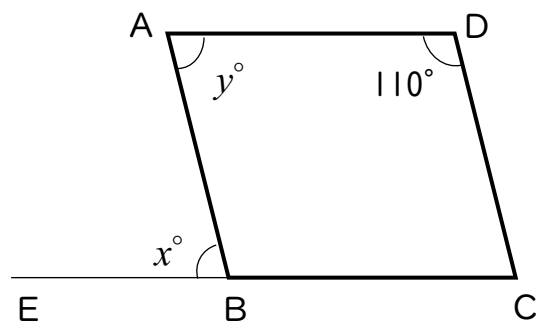
$x = 2, y = 3$

(3)



$x = 130, y = 50$

(4)



$x = 70, y = 70$