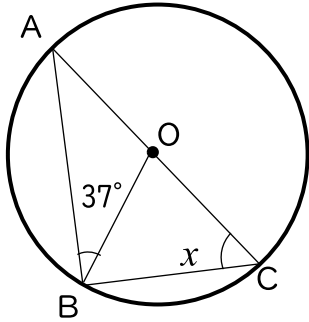


() 組 () 番 名前 ()

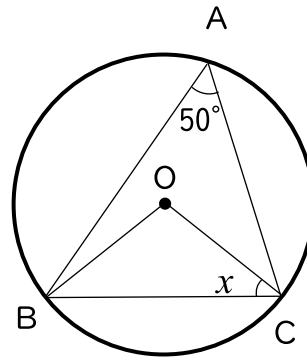
次の図において、 $\angle x$ 、 $\angle y$ の大きさを求めなさい。

(Oは円の中心です。)

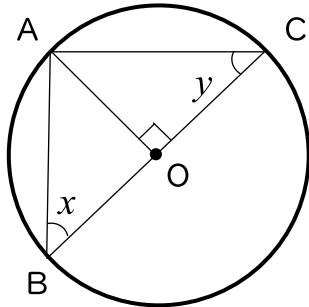
(1)



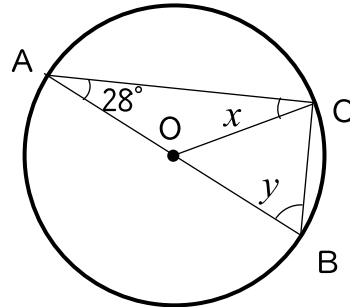
(2)



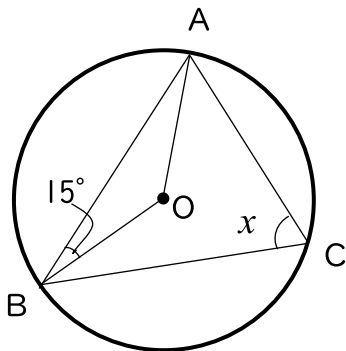
(3)



(4)



(5)



(6)

$OC \parallel AB$

