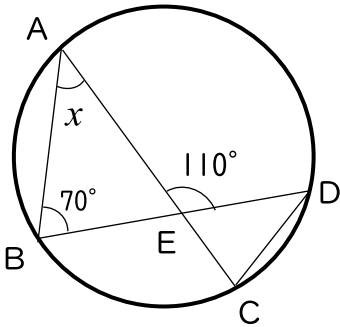


( ) 組 ( ) 番 名前 ( )

次の図において、 $\angle x$  の大きさを求めなさい。(4)は $\angle y$  の大きさも求めなさい。

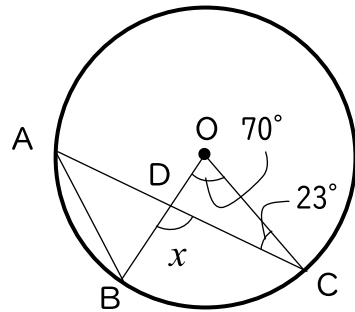
(Oは円の中心です。)

(1)



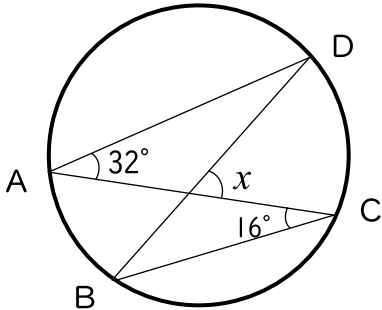
40°

(2)



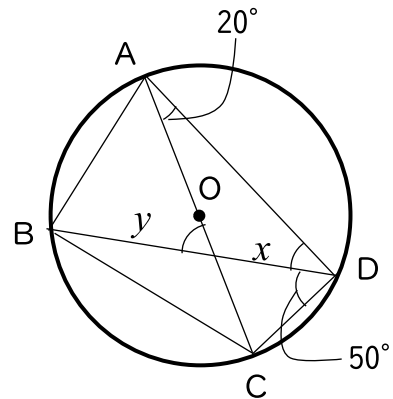
93°

(3)



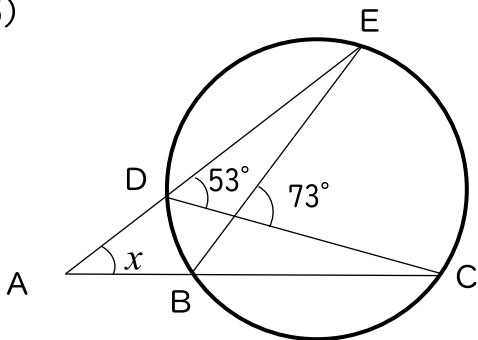
48°

(4)



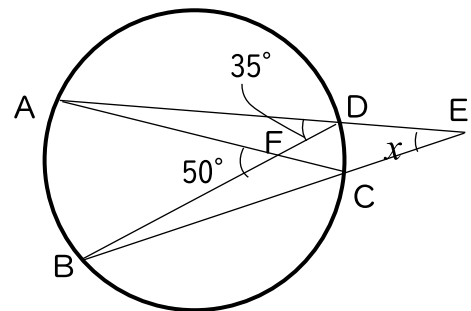
$\angle x = 40^\circ, \angle y = 60^\circ$

(5)



33°

(6)



20°