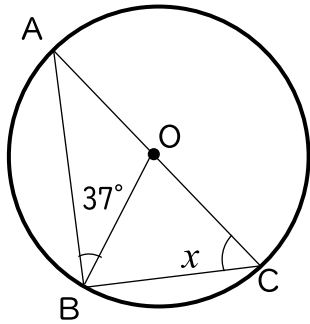


() 組 () 番 名前 ()

次の図において、 $\angle x$ 、 $\angle y$ の大きさを求めなさい。

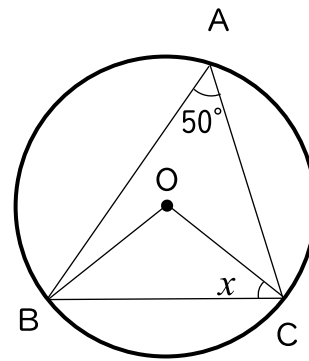
(Oは円の中心です。)

(1)



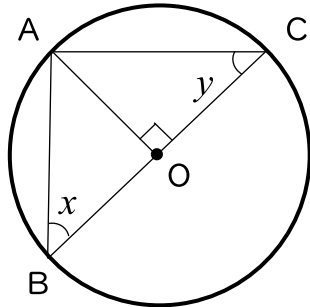
53°

(2)



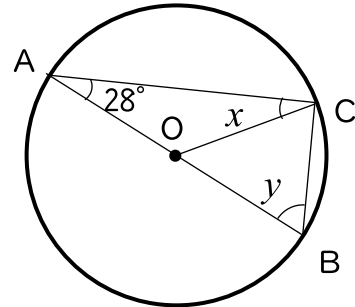
40°

(3)



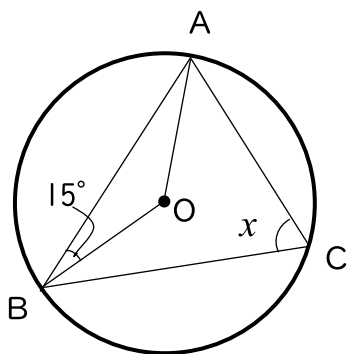
$\angle x = \angle y = 45^\circ$

(4)



$\angle x = 28^\circ, \angle y = 62^\circ$

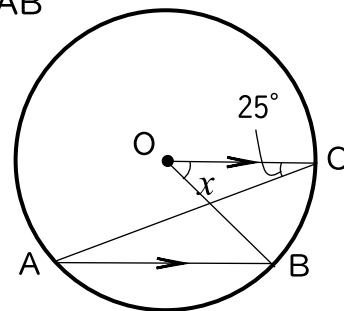
(5)



75°

(6)

$OC \parallel AB$



50°