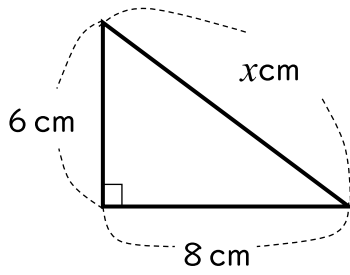


() 組 () 番 名前 ()

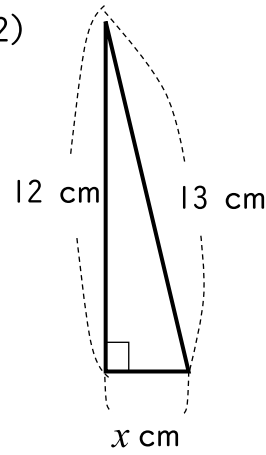
次の直角三角形において、 x の値を求めなさい。

(1)



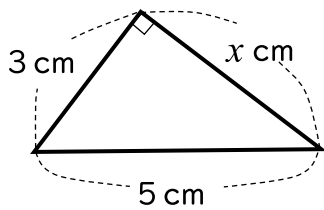
$x = 10$

(2)



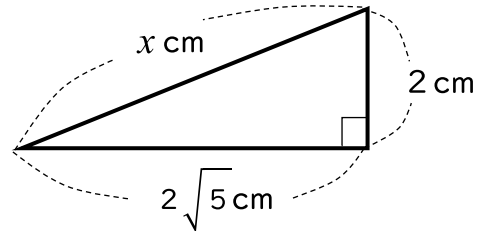
$x = 5$

(3)



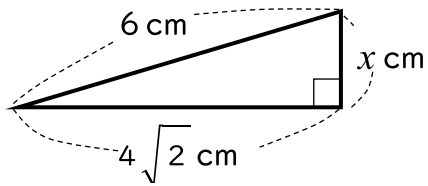
$x = 4$

(4)



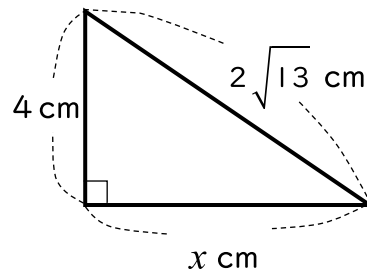
$x = 2\sqrt{6}$

(5)



$x = 2$

(6)



$x = 6$